
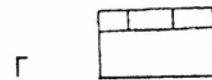
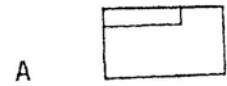
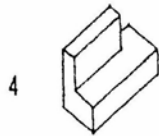
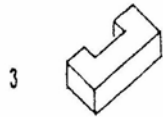
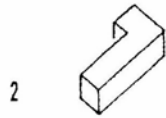
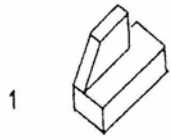


## Ερώτηση αντιστοίχισης

Σε κάθε αξονομετρικό σχέδιο (αριστερή στήλη) να αντιστοιχίσετε μία κάτοψη (Α, Β, Γ, Δ, Ε, Ζ) της δεξιάς στήλης



1. (.....)

2. (.....)

3. (.....)

4. (.....)